

आज़ादी का
अमृत महोत्सव



KENDRIYA VIDYALAYA SANGATHAN



(AHMEDABAD REGION)



ENVIRONMENTAL STUDIES



GRADED
WORKSHEET



CLASS : 3 TO 5



(TERM—II)





आज़ादी का
अमृत महोत्सव



KENDRIYA VIDYALAYA SANGATHAN



(AHMEDABAD REGION)



ENVIRONMENTAL STUDIES



GRADED
WORKSHEET



CLASS : III



(TERM—II)





KENDRIYA VIDYALAYA SANGATHAN
AHMEDABAD REGION
GRADED WORKSHEET

Name of the KV _____

CLASS : 3

SECTION :

SUBJECT: EVS

LEVEL : 1

Concept : Food

Max. Marks: 10

Name of the Student : _____

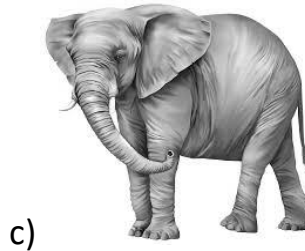


Roll No. _____

Date : _____ Marks Obtained: _____ Sign of Teacher _____

Q. 1 – 10 carry 1 mark each.

A) Tick (✓) the correct answer. (Q.1-10)

Q.1 Among the following, which animal gives us milk?



Q.2 What do honey-bees give us to eat?




a) Honey

b) Bees

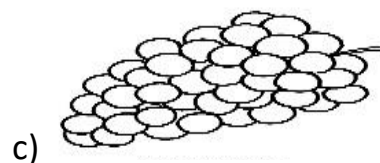
c) Leaves

d) milk

Q.3 Which of the following do we get from plants?



Q.4 Which of the following do we get from animals?



Q.5 What can you take as medicine when you have a stomachache?

- a) Clove b) Spinach c) Ajwain d) Rice

Q.6 What can you take as medicine when you have a toothache?

- a) Clove b) Spinach c) Ajwain d) Rice

Q.7 Which of the following is a root that we eat?

- a) Carrot b) Spinach c) Mango d) Rice

Q.8 Which of the following are leaves that we eat?

- a) Radish b) Mint c) Rose d) Tamarind

Q.9 Which of the following are seeds that we eat?

- a) Neem b) Groundnuts c) Spinach d) Potato

Q.10 Which of the following is a stem that we eat?

- a) Mint b) Groundnuts c) Spinach d) Sugarcane



KENDRIYA VIDYALAYA SANGATHAN

AHMEDABAD REGION

GRADED WORKSHEET

Name of the KV _____

CLASS : 3

SECTION :

SUBJECT: EVS

LEVEL : 2

Concept : Food

Max. Marks: 10

Name of the Student : _____ Roll No. _____

Date : _____ Marks Obtained: _____ Sign of Teacher _____

Q. 1 – 6 carry 1 mark each and Q. 7 – 8 carry 2 marks each.

A) Tick (✓) the correct answer. (Q.1-4)

Q.1 You use a clove as medicine when you have_____.

- a) stomachache b) toothache c) headache d) backpain

Q.2 You use a ginger and honey as medicine when you have_____.

- a) stomachache b) toothache c) headache d) cough and cold

Q.3 Which of the following food item do we get from plant?

- a) Egg b) Meat c) Fish d) Onion

Q.4 Which of the following food item do we get from animal?

- a) Tomato b) Meat c) Potato d) Onion


Q.5 Which food is also called a complete food?

Ans. _____

Q.6 Write names of any two famous food of Gujarat.

Ans. _____

Q.7 Match the following food items with the suitable parts of plant.



Q. 8 Match the following medicinal plants with their uses.

Medicinal plant

Uses

Mint

Tooth ache

Tulsi

Stomach ache

Turmeric

Cough and cold

Clove

Skin disease



KENDRIYA VIDYALAYA SANGATHAN

AHMEDABAD REGION

GRADED WORKSHEET

Name of the KV _____

CLASS : 3

SECTION :

SUBJECT: EVS

LEVEL : 3

Concept : Food

Max. Marks: 10

Name of the Student : _____ Roll No. _____

Date : _____ Marks Obtained: _____ Sign of Teacher _____

Q. 1 – 2 carry 1 mark each and Q. 3 – 6 carry 2 marks each.

A) Tick (✓) the correct answer. (Q.1-2)

Q.1 Which of the following is a flower that we eat?

- a) Rose b) Cauliflower c) Potato d) Sugarcane

Q.2 Which of the following is a medicinal plant?

- a) Tulsi b) Potato c) Gulmohar d) Sugarcane

Q.3 Give answer in one word only.

- a) Write the name of one leafy vegetable.

Ans: _____

- b) Name one food item we get from animal.

Ans: _____

Q.4 Write names of any two medicinal plants.

Ans: _____

Q.5 Write any two activities that your father does in your house to help your Mother.

Ans: 1 _____

_____ 2 _____

Q.6 Look at the following picture and write about the activities being done by each of the family members in the space given below.



Ans: _____



KENDRIYA VIDYALAYA SANGATHAN

AHMEDABAD REGION

GRADED WORKSHEET

Name of the KV _____

CLASS : 3

SECTION :

SUBJECT: EVS

LEVEL : 4

Concept : Food

Max. Marks: 10

Name of the Student : _____ Roll No. _____

Date : _____ Marks Obtained: _____ Sign of Teacher _____

Q. 1 – 5 carry 2 marks each.

Q.1 Write the names of any two famous food items of the following state.

a) Kerala: _____

b) Rajasthan: _____

Q.2 Write the names of two-two food items that we get from plants and animals.

a) Plant food: _____

b) Animal food: _____

Q.3 Write the favourite food of your family members.

My family member	Favourite food

Q.4 Write the names of two food items made from Rice and Wheat each.

Rice: _____, _____ Wheat: _____, _____

Q.5 Who all helps your mother in cooking food? How do they help? Write answer.

Ans: _____



KENDRIYA VIDYALAYA SANGATHAN
AHMEDABAD REGION
GRADED WORKSHEET

Name of the KV _____

CLASS : 3

SECTION :

SUBJECT: EVS

LEVEL : 1

Concept : Travel

Max. Marks: 10

Name of the Student : _____

Roll No. _____

Date : _____ Marks Obtained: _____ Sign of Teacher _____

Q. 1 – 10 carry 1 mark each.

(A) Observe the picture and tick (✓) the correct answer. (Q.1-4)

[Hint: The girl is facing towards the tree]



Q.1 What do you see behind the girl?

- a) tree b) chair c) book d) cow

Q.2 What is there in front of the girl?

- a) tree b) chair c) book d) cow

Q.3 What is there on the left of the girl?

- a) tree b) chair c) book d) cow

Q.4 What is there on the right of the girl?


- a) tree b) chair c) book d) cow

Q.5 6 Identify the following picture and tick the correct option.



- a) Traffic signal ()
b) No parking ()
c) Go slow ()
d) Zebra crossing ()

Q. 6 Identify the following picture and tick the correct option.



- a) Traffic signal
- b) No parking
- c) Go slow
- d) Zebra crossing



Q. 7 Write True or False.

- a) The sun rises in the west. _____
- b) The sun sets in the west. _____

Q. 8 Fill in the blanks.

- a) _____ sign is used to add the numbers. (+, -)
- b) _____ sign is used to multiply the numbers. (+, x)

Q. 9 Draw the symbols for the following.

Places	Symbols
House	
Tree	

Q. 10 Match the following.

Traffic signs



What do they indicate

- Parking
- School ahead
- No horn
- No Parking



KENDRIYA VIDYALAYA SANGATHAN

AHMEDABAD REGION

GRADED WORKSHEET

Name of the KV _____

CLASS : 3

SECTION :

SUBJECT: EVS

LEVEL : 2

Concept : Travel

Max. Marks: 10

Name of the Student : _____ Roll No. _____

Date : _____ Marks Obtained: _____ Sign of Teacher _____

Q. 1 – 6 carry 1 mark each and Q. 7 – 8 carry 2 marks each.

A) Do as directed. (Q.1-8)

Q.1 The sun _____ in the east.

Q.2 Which place is nearer from our school Bank or Park? Ans. _____

Q.3 Name any 2 work places near to your school?

Ans: a) _____ b) _____

Q.4 Name the landmarks near to your house.

a) On a left side of your house: _____

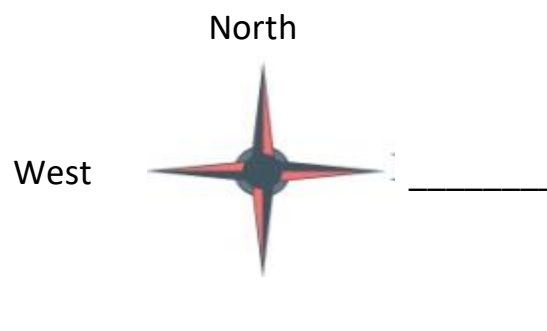
b) On a right side of your house: _____

Q. 5 Fill in the blanks.

a) We use _____ sign to subtract the numbers.

b) We use _____ sign to divide the numbers.

Q.6 Write the names of remaining directions in the blanks.




Q. 7 Write names of any two places with their symbols that are used in a map.

a) _____

b) _____

Q. 8 Fill the colour in the traffic signal and the pole.





KENDRIYA VIDYALAYA SANGATHAN

AHMEDABAD REGION

GRADED WORKSHEET

Name of the KV _____

CLASS : 3

SECTION :

SUBJECT: EVS

LEVEL : 3

Concept : Travel

Max. Marks: 10

Name of the Student : _____ Roll No. _____

Date : _____ Marks Obtained: _____ Sign of Teacher _____

Q. 1 – 2 carry 1 mark each and Q. 3 – 6 carry 2 marks each.

A) Tick (✓) the correct answer. (Q.1-2)

Q.1 Choose the sign of greater than

a) =

b) >

c) <

d) +

Q.2 What does  indicates?

a) Left turn


b) Right turn

c) Up

d) Down

Q. 3 Draw the sign of the following.

a) No Horn



b) U Turn



Q. 4 Match the following.

A

B

1. Traffic rules


Used to indicate the places

2. Signs

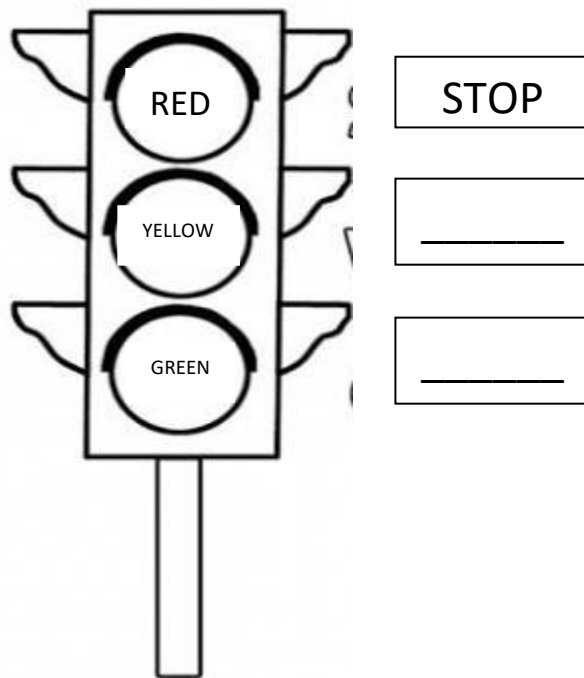
Four main directions

For our safety

Q.5 Write the names of all directions in the blanks.



Q. 6 Fill the colour in the traffic signal and write what each colour indicates.





KENDRIYA VIDYALAYA SANGATHAN
AHMEDABAD REGION
GRADED WORKSHEET

Name of the KV _____

CLASS : 3

SECTION :

SUBJECT: EVS

LEVEL : 4

Concept : Travel

Max. Marks: 10

Name of the Student : _____

Roll No. _____

Date : _____ Marks Obtained: _____ Sign of Teacher _____

Q. 1 – 5 carry 2 marks each.



Q.1 Name two states from East India.

a) _____

b) _____

Q.2 Name two states from West India.

a) _____

b) _____

Q.3 Name two states from North India.

a) _____


b) _____

Q.4 Name two states from South India.

a) _____

b) _____

Q.5 Draw and fill the colour in the traffic signal in correct order.





KENDRIYA VIDYALAYA SANGATHAN

AHMEDABAD REGION

GRADED WORKSHEET

Name of the KV _____

CLASS : 3

SECTION :

SUBJECT: EVS

LEVEL : 1

Concept: Work and Play

Max. Marks: 10

Name of the Student : _____

Roll No. _____

Date : _____ Marks Obtained: _____ Sign of Teacher _____

Q. 1 – 10 carry 1 mark each.

A) Observe the following pictures of some games and identify their names. (Q.1-3)

Q.1 Select the correct name of the following game by putting a (✓)



a) Basketball ()

b) Cricket ()

c) Hockey ()

Q.2 Observe the following picture and identify the game.




a) Basketball ()

b) Football ()

c) Volleyball ()

Q.3 Observe the following picture and select the correct game.



a) Table-tennis ()

b) Badminton ()

c) Volleyball ()

B) Tick (✓) the correct options. (Q. 4-10)

Q.4 Which is/are not an outdoor game among the following options?

- A) Chess ()
- B) Football ()
- C) Table tennis ()

Q.5 Which games are played on a square board among the following options??

- A) Chess ()
- B) Carrom ()
- C) Hop-scotch ()

Q.6 Which are the indoor games among the following options?

- A) Football ()
- B) Chess ()
- C) Ludo ()

Q.7 Which game is played with a stick and a ball?

- A) Kabaddi ()
- B) Chess ()
- C) Hockey ()

Q.8 The national game of India is

- A) Kabaddi ()
- B) Chess ()
- C) Hockey ()

Q.9 The game which can be played without any playing kit

- A) Kabaddi ()
- B) Chess ()
- C) Hockey ()

Q,10 Select name of the famous Indian personality associated with cricket.

- A) Sachin Tendulkar ()
- B) Saina Nehwal ()
- C) Vishwanathan Anand ()



KENDRIYA VIDYALAYA SANGATHAN

AHMEDABAD REGION

GRADED WORKSHEET

Name of the KV _____

CLASS : 3

SECTION :

SUBJECT: EVS

LEVEL : 2

Concept: Work and Play

Max. Marks: 10

Name of the Student : _____ Roll No. _____

Date : _____ Marks Obtained: _____ Sign of Teacher _____

Q. 1 – 6 carry 1 mark each and Q. 7 – 8 carry 2 marks each.

A) Write answers. (Q.1-2)

Q.1 Write the name of the following game that we play on the board.



Ans: _____.

Q.2 What is the name of the following game? Write answer.



Ans: _____.

Tick (✓) the correct answer. (Q.3-6)

Q.3 Which game needs a very big ground to play?

- a) Table-tennis b) Ludo c) Badminton d) Cricket

Q.4 In which game word “Check and Mate” is used?

- a) Table-tennis b) Ludo c) Chess d) Cricket

- Q.5 Look at the following picture and identify the name of the game. In this game we use a ball and hit it.



- a) Seven-tiles b) River and mountain c) Throw-ball d) Golf
- Q.6 In the following picture the child is playing with _____.



- a) Stones b) Pebbles c) Marbles
- Q.7 Classify the following games into indoor games and two outdoor games.

Cricket	Chess	Seven-tiles	Ludo
Indoor games		Outdoor games	

- Q.8 Encircle the odd one out for the following games.

Cricket-	Batsman	Bowler	Run	Table
Badminton-	Stump	Racket	Service	Shuttlecock



KENDRIYA VIDYALAYA SANGATHAN

AHMEDABAD REGION

GRADED WORKSHEET

Name of the KV _____

CLASS : 3

SECTION :

SUBJECT: EVS

LEVEL : 3

Concept: Work and Play

Max. Marks: 10

Name of the Student : _____ Roll No. _____

Date : _____ Marks Obtained: _____ Sign of Teacher _____

Q. 1 – 2 carry 1 mark each and Q. 3 – 6 carry 2 marks each.

Q.1 Which game does not need a ball to play? Encircle it.


a) Soccer

b) Golf

c) Table-tennis

d) Badminton

Q.2 Identify the game board and write the name of the game associated with it.



Ans: _____

Q.3 Following sports is played between two teams. Match the sports with the number of their active players on the field in each team.

Name of the sport

No. of active players on the field

Field Hockey

4-4

Kabaddi

11-11

Basketball

7-7

Polo

5-5

Q.4 Classify the following games into Indian games and foreign games.

Golf

Gilli-danda

Kho-kho

Rugby

Traditional games	Modern games

Q.5 Match the names of the sports with their balls.



Basketball



Football

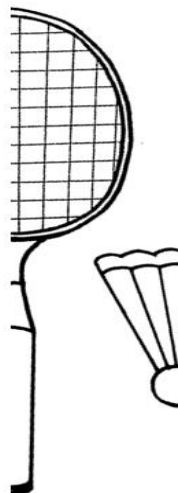


Cricket



Volleyball

Q.6 Complete the mirror halves of the following pictures and identify the name of the sport associated with it.



The name of the game is _____.



KENDRIYA VIDYALAYA SANGATHAN

AHMEDABAD REGION

GRADED WORKSHEET

Name of the KV _____

CLASS : 3

SECTION :

SUBJECT: EVS

LEVEL : 4

Concept: Work and Play

Max. Marks: 10

Name of the Student : _____

Roll No. _____

Date : _____ Marks Obtained: _____ Sign of Teacher _____

Q.1 Match the following pictures with their names.



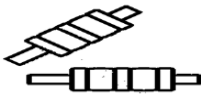
Bat



Ball



Stumps



Bails

Q.2 Tick (✓) the correct option for the following questions.

a) Which term is used for 100 runs in cricket?

a) Sanctuary b) Century c) Half century d) Double century

b) Which game does not need a ball to play?

a) Soccer b) Golf c) Table-tennis d) Badminton


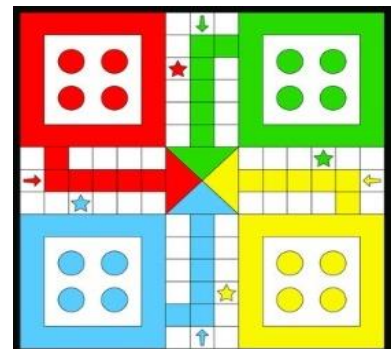
Q.3 Write the names of any two games that you play with your friends.

Name of friends	Name of the Game

Q.4 State whether the following statements are true (T) or false (F).

- 1) Playing team games teaches us the values of teamwork and cooperation. ()
- 2) Yachting, wind surfing and diving are called adventure sports. ()
- 3) Some people play games as a profession. ()
- 4) In hop scotch, if our leg touches the line we are out. ()

Q.5 Match the following cookies set with their game boards.





KENDRIYA VIDYALAYA SANGATHAN

AHMEDABAD REGION

GRADED WORKSHEET

Name of the KV _____

CLASS : 3

SECTION :

SUBJECT: EVS

LEVEL : 1

Concept : Family and Friends

Max. Marks: 10

Name of the Student : _____

Roll No. _____

Date : _____ Marks Obtained: _____ Sign of Teacher _____

Q. 1 – 10 carry 1 mark each.

A) Tick (✓) the correct answer. (Q.1-3)

Q.1 How many sense organs do we have?

a) Three

b) Five

c) Seven

Q.2 Among the following, which is not a sense organ?

a) Nose

b) Ear

c) Hair

Q.3 Among the following, whom do you consider as a senior citizen?

a) A person who is 5 years old.

b) A person who is 25 years old.

c) A person who is 65 years old.

Answer the following questions

Q.4 a) How many members are there in your family? Ans: _____

b) How many of them are children? Ans: _____

How do we recognise them in your language

Q.5 My father's mother is my grandmother , I call her _____

Q.6 My mother's father is my grandfather, I call him _____

Q.7 Which script is used by the blind people to read and write?

Ans: _____.

Q.8 Which language is used by deaf and dumb people to communicate?

Ans: _____.

State true or false

Q.9 Blind people have strong sense of smelling and hearing.

Ans: _____.

Q.10 Louis Braille invented the Braille script.

Ans: _____.



KENDRIYA VIDYALAYA SANGATHAN
AHMEDABAD REGION
GRADED WORKSHEET

Name of the KV _____

CLASS : 3

SECTION :

SUBJECT: EVS

LEVEL : 2

Concept : Family and Friends

Max. Marks: 10

Name of the Student : _____

Roll No. _____

Date : _____ **Marks Obtained:** _____ **Sign of Teacher** _____

Q. 1 – 6 carry 1 mark each and Q. 7 – 8 carry 2 marks each.

A) Tick (✓) the correct answer. (Q.1-4)

Q.1 Identify the world famous person shown in the image given below who invented the Braille script.



- a) Thomas Braille
- b) Louis Braille
- c) Smith Braille

Q.2 Identify the world famous person shown in the image given below who could not see and hear.



- a) Helen Peller
- b) Helen Teller
- c) Helen Keller

Q.3 Which people use Braille script to read and write?

- a) The people who cannot speak.
- b) The people who cannot hear.
- c) The people who cannot see.

Q.4 Select any two common facts about very old people life style.

- a) They can climb stairs very fast.
- b) They can digest hot and spicy food.
- c) They cannot walk very fast.

d) They need love and care.

Q.5 Fill in the blanks by choosing the correct option.

i) We can _____ with our eyes.

ii) We can _____ with our skin.

Q.6 Write the names of your grandfather and grandmother.

Ans: _____

Q.7 Who is the oldest family member in your home? Write his/her age.

Ans: _____.

Q.8 Who is the youngest family member in your home? Write his/her age.

Ans: _____.



KENDRIYA VIDYALAYA SANGATHAN
AHMEDABAD REGION
GRADED WORKSHEET

Name of the KV _____

CLASS : 3 SECTION : SUBJECT: EVS LEVEL : 3

Concept : Family and Friends Max. Marks: 10

Name of the Student : _____ Roll No. _____

Date : _____ Marks Obtained: _____ Sign of Teacher_____

Q. 1 – 2 carry 1 mark each and Q. 3 – 6 carry 2 marks each.

Choose the correct option

1. A small family is also called a _____ family.

- a) joint family b) nuclear family c) big family

2. This picture is of _____ family.



- a) joint family
b) nuclear family
c) small family

Q.3 Match the following four categories of people with their appropriate age-groups.

Categories

Age-groups

Children

15-24 years

Youth

65 years and over

Adults

00-14 years

Seniors

25-64 years

Q.4 Write the names of your family members.

- Father _____
- Mother _____
- Brother _____
- Sister _____

Q.5 a) Who is the tallest member in your family? Ans: _____

b) Measure his/her height and write. Ans: _____ cm

Q.6 a) Who is the shortest member in your family? Ans: _____

b) Measure his/her height and write. Ans: _____ cm



KENDRIYA VIDYALAYA SANGATHAN

AHMEDABAD REGION

GRADED WORKSHEET

Name of the KV _____

CLASS : 3

SECTION :

SUBJECT: EVS

LEVEL : 4

Concept : Family and Friends

Max. Marks: 10

Name of the Student : _____

Roll No. _____

Date : _____ Marks Obtained: _____ Sign of Teacher _____

Q. answer the following questions

1 – 5 carry 2 marks each.

Q.1 What kind of problems do people have in old age?

Q.2 How do you help your grandparents? Write two ways.

Ans: _____

Q.3 Measure the height of the tallest and shortest member of your family and find the difference between the two.

Ans: _____

Q.4 Complete the following statements.

- Your mother is your father's _____
- Your brother's grandparents are your _____


Q.5 Put a tick (✓) for the correct statement and cross (×) for the wrong statement.

a. Children and old people need our love and care. ☐

b. We must obey our elders. ☐

c. Our family protects us from all the bad things. ☐

d. Grandparents are the roots of our family. ☐



आज़ादी का
अमृत महोत्सव



KENDRIYA VIDYALAYA SANGATHAN



(AHMEDABAD REGION)



ENVIRONMENTAL STUDIES



GRADED
WORKSHEET



CLASS : IV



(TERM—II)





KENDRIYA VIDYALAYA SANGATHAN
AHMEDABAD REGION
GRADED WORKSHEET

Name of the KV _____

CLASS :4

SECTION :

SUBJECT:EVS

LEVEL : 1

Concept : Food

Max. Marks :10

Name of the Student : _____ Roll No. _____

Date : _____ Marks Obtained: _____ Sign of Teacher _____

❖ Choose the correct answer by putting a tick ()

(1) Which food item is being prepared in this picture?

- (a) Chapati
- (b) Kadhah Prasad
- (c) Masala Dosa



(2) Sikh people worship in.....

- (a) Temple
- (b) Church
- (c) Mosque
- (d) Gurudwara



(3) Many can be baked in this kind of stove at a time.

- (a) Chapaties
- (b) Dal
- (c) Puris

(b)..... (Ghee / Butter) is applied on chapaties in Langar



(4) Write correct names of the following stoves using hint from the jumbled words.



DUM HALCUH



GLP SAG TOSVE



CROMIVEWA VOEN



INDUCTION KEROOC

5 Answer the following questions

In gurudwara from where food is provided ?

6 On which thing do people sit and eat to take food in Gurudwara.



7 Encircle the food items prepared from wheat.

Porridge (Dalia) Cooked Rice Chapati Idli Dosa
Poha Kadhah Prasad Biscuits Dal Bread Noodles

8 Tell who am I?

I make food spicy -----

I am small black pearl-----

9 Know your rights

Mid-day meal is every child's -----

10 People of Assam eat -----rice while celebrating Bihu.



KENDRIYA VIDYALAYA SANGATHAN
AHMEDABAD REGION
GRADED WORKSHEET

Name of the KV _____

CLASS :4

SECTION :

SUBJECT:EVS

LEVEL : 2

Concept : Food

Max. Marks :10

Name of the Student : _____ Roll No. _____

Date : _____ Marks Obtained: _____ Sign of Teacher _____

Observe the picture and answer. Put a tick on the right answer.

(1) The following places of worship is used by(2 MARKS)



(a) Sikh People (b) Islam people (c) Christians

(2) Which of the following utensils is not used for cooking food?(encircle)



(a) Tawa (b) Bucket (c) Tope

(3) Which of the following is a type of *Halwa* ?

(a) Shahi Paneer (b) Dum-aaloo (c) Kadhah Prasad

(4) 'Golden Temple' is a?

(a) Temple (b) Church (c) Mosque (d) Gurudwara

(5) Golden Temple is located in

(a) Gandhinagar- Gujarat (b) Amritsar - Punjab

(6) Choose the correct answer:

Kadhah Prasad is distributed (Before / After) Ardaas.

(7) Write True or False:

Ardaas is a reading of Shree Guru Granth sahib.

(8) draw any one utensil used for cooking. (2)





**KENDRIYA VIDYALAYA SANGATHAN
AHMEDABAD REGION
GRADED WORKSHEET**

Name of the KV _____

CLASS :4

SECTION :

SUBJECT:EVS

LEVEL : 3

Concept : Food

Max. Marks :10

Name of the Student : _____ Roll No. _____

Date : _____ Marks Obtained: _____ Sign of Teacher _____

❖ Answer the following:

(5) What are the children doing in this picture?

- (d) Enjoying a class party
- (e) Enjoying a dance party
- (f) Playing a game



(6) Bhela ghar is prepared from which of the following?

- (c) Bamboo and Grass (c) mud and cow dung
- (d) Cement and sand (d) Iron road and wood



(7) Choose the correct answer:

- (a) Uruka is the (first / second) of Bihu festival.
- (b) Bora is a common variety of (rice / wheat) that is used in Assam.

(8) Encircle the names of the food items that are prepared from rice.

- | | | | | |
|---------|-------------|----------|----------|-------------|
| Chapati | Cooked Rice | Bread | Biscuits | Kheer |
| Poha | Popcorns | Porridge | Dosa | Corn flakes |



(9) Find the names of some harvesting festival from the grid given below: (3)

R	L	O	H	R	I	I	N	G	S	D	R	T	T	F
T	A	U	N	P	L	K	W	E	A	R	O	T	H	B
Y	R	Y	B	I	H	U	F	U	W	P	N	I	U	A
M	A	K	A	R	A	S	A	N	K	R	A	N	T	I
S	A	T	R	T	Y	W	T	G	Y	U	M	I	O	S
A	S	S	G	Y	S	U	J	K	O	M	L	B	X	A
G	E	V	B	J	K	A	M	M	Y	T	T	I	O	K
H	P	O	N	G	A	L	B	H	Y	I	M	N	S	H
T	F	K	F	M	V	C	A	Y	C	V	F	G	H	I

(10) Read it properly and answer the questions that follows: (3)

Mid-day Meal

EVERY CHILD'S RIGHT

Many children in our country are not able to get even one full meal every day. Many of them go to school empty stomach and cannot study properly.

Some years ago, the highest court of our country gave an important decision. All children up to elementary school should be provided with hot, cooked food. This is the right of every child.

Tick the correct option:

(a) What is the right of every child?

- (i) Morning Breakfast (ii) Mid-Day Meal (iii) Dinner

(b) Why were the children not able to study properly?

- (i) They do not have notebooks
(ii) They go to school by walking
(iii) They go to school by empty stomach

(c) Who gave an important decision, some years ago?

- (i) Head Master of the school
(ii) The highest court of our country
(iii) The Prime Minister of our country

(d) Many children in our country are not able to get one every day.

- (i) Notebook (ii) chocolate (iii) Full meal

Write true or false

(e) Mid – Day Meal is provided in the evening. True/ False ?

(f) Balanced diet is good for our health.(true/false) -----



KENDRIYA VIDYALAYA SANGATHAN
AHMEDABAD REGION
GRADED WORKSHEET

Name of the KV _____

CLASS :4 SECTION : SUBJECT:EVS LEVEL : 4

Concept : FOOD Max. Marks :10

Name of the Student : _____ Roll No. _____

Date : _____ Marks Obtained: _____ Sign of Teacher _____

❖ Answer the following:

(1) Which of the following food item is prepared from maize plant?



(a) Biscuits

(b) Corn flakes

(c) Chips

(d) Noodles

(2) Put the names of utensils in proper columns.

Kadahi

Pressure cooker

Plates

Bowl

Spoons

Used to serve food	Used to cook food

(3) Write the difference:

Studying in boarding school/ hostel	Studying in Hostel

(4) Match the following stoves with the fuel used in it.



Wood



Electricity



Kerosene



LPG

(5) Describe how the food is prepared in the kitchen of the Gurudwaras.

.....

.....

.....

.....

.....

.....

.....

.....



KENDRIYA VIDYALAYA SANGATHAN
AHMEDABAD REGION
GRADED WORKSHEET

Name of the KV _____

CLASS : 4 SECTION : SUBJECT: EVS LEVEL : 1

Concept : Travel Max. Marks : 10

Name of the Student : _____ Roll No. _____

Date : _____ Marks Obtained: _____ Sign of Teacher _____

1. Observe the model and name it.



2. Find out and encircle the INDIAN currency .



3. From the above pictures find out.

Name of the Indian Currency called _____

4. Tick the correct answer from the options given below.

i) The Indian currency is printed by _____

a. State Bank b. Indian Bank c. Reserve Bank

ii) The fastest means of transport is _____

a. Boat b. bus. c. Aeroplane

5. Choose the correct alternative.

Abu Dabhi is (a) part of India (b) out of India.

6. State true or false.

Kerala is in South of India. _____

7. Fill in the blanks.

i) Area covered with sand only is called _____.

ii) Father's brother is called _____ in Kerala.

8. Write one word for.


The local language of Abu Dabhi is _____.

9. Give reason.

There is more water in Kerala .

Cotton clothes are preferred during summers.

10. Draw and color any one land transport.





KENDRIYA VIDYALAYA SANGATHAN
AHMEDABAD REGION
GRADED WORKSHEET

Name of the KV _____

CLASS : 4 SECTION : SUBJECT: EVS LEVEL : 2

Concept : Travel Max. Marks :10

Name of the Student : _____ Roll No. _____

Date : _____ Marks Obtained: _____ Sign of Teacher _____

1. Fill in the blanks with words in the help box.

Help box
Sand dunes , oil , date , palm , United Arab Emirates , Kerala

I. Hills of sand are called _____

II. There is a lot of _____ under the sandy soil.

2. Look at these currency notes. Write the value of each note in the box.



a) Whose picture can you see on the notes ?

Ans _____

b) Do you think that two notes can have the same number?

Ans _____

3. Number the sequences in correct order.

Boarding an aeroplane ☐

Checking inside the airport ☐

Packing bags ☐

Entering an airport ☐

4. State true or false.

1. The apple tree is the most common tree found in Abu Dhabi . _____

2. Kerala is a desert. _____

5. What do you call ?

Maternal grandmother is called nani in Hindi What do you call in your language ?

6. Match the following.

Kerala Abu Dabhi

UAE Thiruvanthampuran

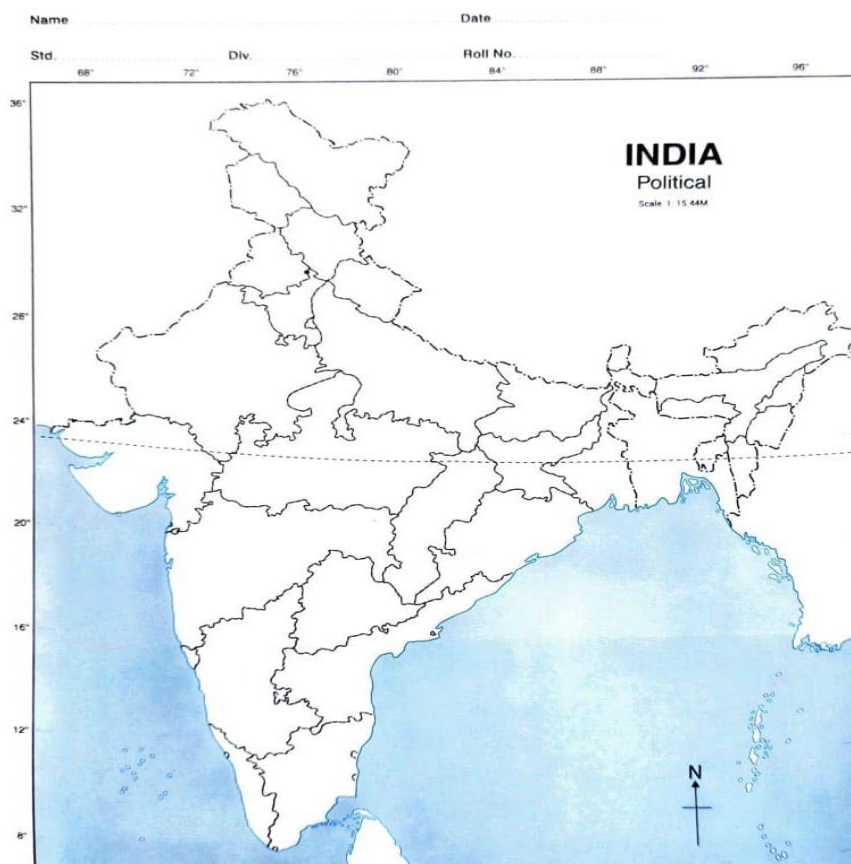
7. Put the following in proper boxes.

(dates, palm, banana, jackfruit, papaya, betel nut)

Dry area	Fruits of green area

8. Locate the following places in map of India.

1. Kerala 2. Cochi 3. Chennai 4. Gujarat





KENDRIYA VIDYALAYA SANGATHAN
AHMEDABAD REGION
GRADED WORKSHEET

Name of the KV _____





CLASS : 4 SECTION : SUBJECT: EVS LEVEL : 3

Concept : Travel Max. Marks : 10

Name of the Student : _____ Roll No. _____

Date : _____ Marks Obtained: _____ Sign of Teacher _____

1. Observe the currency given below and write the name of the country. (2 Marks)

Currency	Name of country
	
	
	
	

2. Choose the correct form from the given options.

(4 Marks)

(greenery, cheaper, globe, palm ,hot)

1. The climate of Abu Dhabi is _____

2. Kerala has lots of _____ .

3. Petrol is _____ than water in Abu Dhabi .

4. The only tree one can see in Abu Dhabi is _____.

Answer the following questions.

(4 Marks)

5) What is the color of sand ? _____

6) What happens when color of sand changes? _____

7) Which area is called a desert? _____

8) Name anyone desert of India. _____



KENDRIYA VIDYALAYA SANGATHAN
AHMEDABAD REGION
GRADED WORKSHEET

Name of the KV _____

CLASS : 4 SECTION : SUBJECT: EVS LEVEL : 4

Concept : Travel Max. Marks : 10

Name of the Student : _____ Roll No. _____

Date : _____ Marks Obtained: _____ Sign of Teacher _____

1. Think, Find and Write :

(4 Marks)

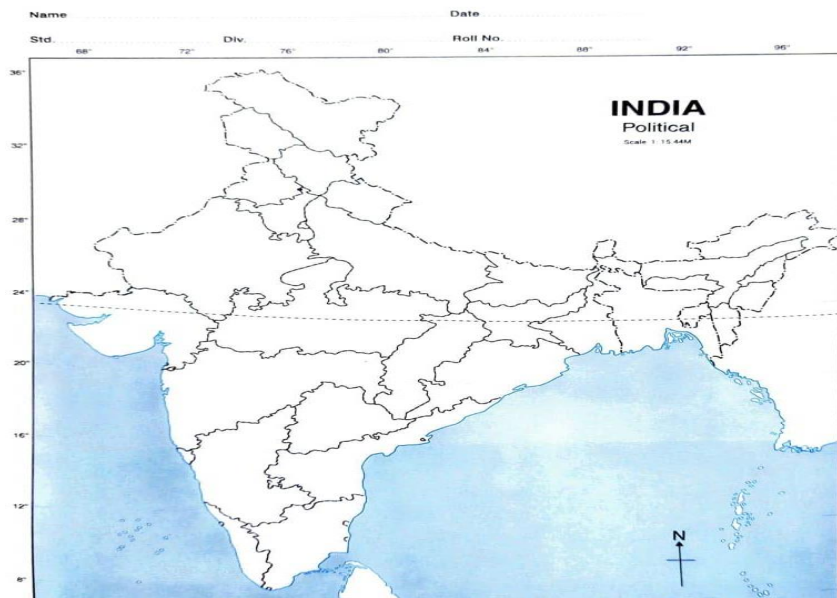
Make a comparison between Kerala and Abu Dhabi regarding the points given below in column A of the table given below.

Column A	Kerala	Abu Dhabi
Landform		
Currency		
Language Spoken		
Types of building		

2. Map recording. Write and locate the

costal area of India. (Any four)

(2Marks)



Give reasons.

3. High rise buildings are found in Saudi Arabia.

4. Buildings are air conditioned from inside.

5. The head of Arabic people is covered with cloth.

6. Give the full form of UAE. _____



KENDRIYA VIDYALAYA SANGATHAN AHMEDABAD REGION GRADED WORKSHEET

Name of the KV _____

CLASS :4

SECTION :

SUBJECT: EVS

LEVEL : 1

Concept : Plant/ Work we do

Max. Marks :10

Name of the Student : _____

Roll No. _____

Date : _____ Marks Obtained: _____ Sign of Teacher _____



(A) Tick the correct option:

(1 X10 = 10 Marks)

1. Onion is found

(a) Above the ground (b) Under the ground

2. The color of onion is

(a) Reddish pink (b) Pinkish blue

3. The onion seeds were sown in the month of

(a) June (b) July (c) August (d) December

(B) Choose and write the correct option from the alternatives given below.

4. Plants grow very well in the _____ season.

Summer (b) Monsoon (c) Winter

5. Mostly plants grow because of _____.

Flower (b) Fruit (c) Seeds

(C) Fill in the blanks.

6. The person who ploughs a field is a _____.

7. In modern days _____ is plough the field.

(D) Tick true or false.

8. A seed should be sown very close to each other. (True/False)

9. Weeds are wanted plants.(True/False)

(E) One line sentence.

10.Name your favorite plant. _____



KENDRIYA VIDYALAYA SANGATHAN
AHMEDABAD REGION
GRADED WORKSHEET

Name of the KV _____

CLASS :4

SECTION :

SUBJECT: EVS

LEVEL : 2

Concept : Plant/ Work we do

Max. Marks :10

Name of the Student : _____ Roll No. _____

Date : _____ Marks Obtained: _____ Sign of Teacher _____

(A) Give one word for each blank. (2 Marks)

(harvesting, thrashing, ploughing, weeds

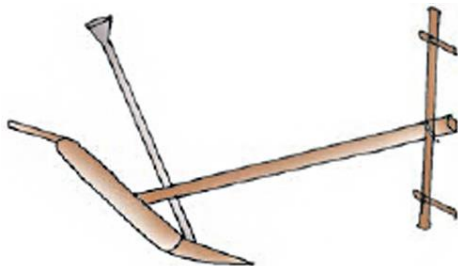
1. Unwanted plants on farm which grow along with main crop.

2. Cutting of ready crop

3. Removing of grains by beating on hard surface machines

4. To make soil loose, soft using tractor or plough

(B) Given here are pictures of some implements used by farmers.
Write the names and uses of the implements. (1 Mark)



(B) Choose the correct process that took place in the seed from the following. (1 Mark)
(mixing, planting, sprouting)



(C) What are the important things required plant to grow?

(3 Marks)

1. _____

2. _____

3. _____

(E) Why plants are important for us? (Write 3 points) (3 Marks)



KENDRIYA VIDYALAYA SANGATHAN
AHMEDABAD REGION
GRADED WORKSHEET

Name of the KV _____

CLASS :4

SECTION :

SUBJECT: EVS

LEVEL : 3

Concept : Plant/ Work we do

Max. Marks :10

Name of the Student : _____ **Roll No.** _____

Date : _____ **Marks Obtained:** _____ **Sign of Teacher** _____

Q:1 By whom is the seeds dispersed ?

(1 Mark)



Q:2

(3 Marks)



Guess who am I? _____

What materials are used in making it? _____

Q:3 Encircle the odd one out.

(1 Mark)

Rain, tap, pond, tubewell
Sickle, nailcutter, plough, tap

Q:4 Complete the name by filling the missing alphabets.

(1 Mark)

K A ____ N A ____ A K A

Q:5 Riddle.

(2 Marks)

I am red in color and called farmer's friend. _____

Q:6 How are crops transported from the fields to the godowns after they are harvested?

(2Marks)



KENDRIYA VIDYALAYA SANGATHAN AHMEDABAD REGION GRADED WORKSHEET

Name of the KV _____

CLASS : 4

SECTION :

SUBJECT: EVS

LEVEL : 4

Concept : Plant/ Work we do

Max. Marks : 10

Name of the Student : _____ Roll No. _____

Date : _____ Marks Obtained: _____ Sign of Teacher _____

Q:1 Many steps are needed to grow crops. Look at the pictures and mark them in correct order. (3 Marks)



Que-2 How various techniques are followed in organic farming ?

(2 Marks)

Ploughing _____

Irrigation _____

Fertilizers _____

Storage _____

Que-3 Observe the picture and answer the following question. (1Mark)



How do we know that onions are ready to be taken out?

Q: 4 Why this human model is kept in fields?

(2 Marks)



1`
Q:5 Write any two use of a fertilizers in fields. (2 Marks)



KENDRIYA VIDYALAYA SANGATHAN
AHMEDABAD REGION
GRADED WORKSHEET

Name of the KV _____

CLASS :4 SECTION : SUBJECT: EVS LEVEL : 1

Concept : Family And Friends(birds) Max. Marks :10

Name of the Student : _____ Roll No. _____

Date : _____ Marks Obtained: _____ Sign of Teacher _____

Que-1 Observe the bird and name it.

(weaver bird ,robin bird ,sunbird)



Q:2 Tick the correct option

i) Birds make nests for -

(a) Looking after their young (b) hatching their eggs (c) laying eggs (d) All of these

Q:3 Choose the correct alternative.

i) Only the female bird makes the nest. (True / False)

ii) All the birds eat grains and vegetables. (True/ false)

Q:4 Fill in the blanks with correct option.

i) Birds can fly with their _____. (wings, tails)

ii) Eagle can fly, high up in the _____. (tree, sky)

Q:5 Give one word answer.

i) National Bird of India - _____

ii) A bird that cannot fly - _____

Q:6 Name the label part of bird's body .



Q: 7 Match the type of claws in column A to the bird in columns B according to their feet.

Column A



To catch its prey



To swim in water

Column B

Duck

Hawk

Q:8 Write atleast two things used for making a nest. _____

Q:9 Name the baby of hen. _____

Q:10 Name the bird that sings sweetly during summer. _____



KENDRIYA VIDYALAYA SANGATHAN
AHMEDABAD REGION
GRADED WORKSHEET

Name of the KV _____

CLASS : 4 SECTION : _____ SUBJECT: EVS LEVEL : 2

Concept : Family And Friends(birds) Max. Marks :10

Name of the Student : _____ Roll No. _____

Date : _____ Marks Obtained: _____ Sign of Teacher _____

Q 1. Select the correct option-

i) The bird that lays its eggs inside two leaves stitched together.

- a) crow (b) barbet (c) koel (d) None of these

Q:2 Choose the correct answer and fill in the blank.

(Cows, Squirrels, Birds)

- i) _____ have different types of beaks.
ii) The front teeth of _____ grow throughout its life.

Q 3 Write 'T' for True and 'F' for following statements.

- i) The koel/lays its eggs in another bird's nest. _____
ii) A straight pointed beak in a bird is helpful to tear and eat meat. _____

Q 4 Name two creatures which are enemies of birds. _____

Q 5 The name of bird given below in jumbled form. Write the correct name of the bird against

APSROWR = _____

Q 6 How do birds fly?

Ans

Q 7 Name the bird.



Q:8 Where do the birds lay their eggs? _____



**KENDRIYA VIDYALAYA SANGATHAN
AHMEDABAD REGION
GRADED WORKSHEET**

Name of the KV _____

CLASS : 4 SECTION : _____ SUBJECT: EVS LEVEL : 3

Concept : Family And Friends(birds) Max. Marks :10

Name of the Student : _____ Roll No. _____

Date : _____ Marks Obtained: _____ Sign of Teacher _____

- 1- Label the body parts of the bird. Use the parts given in the brackets.
(wings, claws, eyes, beak)



2. Write the name of the following birds.

i) Bird suck nectar from flowers - _____

ii) Bird having crown on his head - _____

3. Match the beak type to the food it is best suited for.

BEAK

FOOD

(i)



Probing beak

(a)



(ii)



Hooked beak

(b)



Q:4 Name the following -

i) The bird with the largest egg

ii) Smallest bird

Q:5 Making a circle choose odd one out. Sparrow , Pigeon, Aeroplane, Parrot

Q:6 Write name of any two tests of birds. _____



KENDRIYA VIDYALAYA SANGATHAN
AHMEDABAD REGION
GRADED WORKSHEET

Name of the KV _____

CLASS : 4 SECTION : _____ SUBJECT: EVS LEVEL : 4

Concept : Family And Friends(birds) Max. Marks :10

Name of the Student : _____ Roll No. _____

Date : _____ Marks Obtained: _____ Sign of Teacher _____

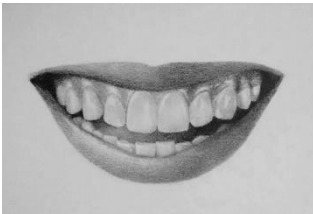
Q 1 Choose the correct option for

Who am I? (Squirrel, Cow, Snake, Cat)

i) I have short front teeth for snipping grass. The teeth on the sides are large and flat for chewing the grass. _____

iii) I have sharp teeth for tearing and cutting meat. _____

Q:2 Look into the picture and write how the set of front teeth useful.



Q 3.Name two Bird sanctuaries of India. _____

Q:4 Name one migratory bird of Gujarat. _____

Q:5 Why Nal Sarovar is popular in Gujarat?



आज़ादी का
अमृत महोत्सव



KENDRIYA VIDYALAYA SANGATHAN



(AHMEDABAD REGION)



ENVIRONMENTAL STUDIES



GRADED
WORKSHEET



CLASS : V



(TERM—II)





KENDRIYA VIDYALAYA SANGATHAN
AHMEDABAD REGION
GRADED WORKSHEET

Name of the KV _____

CLASS :5 SECTION : ____

SUBJECT: EVS

LEVEL : 1

Concept : FOOD AND PLANT

Max. Marks :10

Name of the Student : _____ Roll No. _____

Date : _____ Marks Obtained: _____ Sign of Teacher _____

1 Observe the picture and write their name.



2 I am known as "soil's friend". I am useful for plant's growth
Guess & tick who am I? (Snake / earthworm)



3. Write the names of the spices used in your kitchen. _____

4 Write the names of two food items you eat made from wheat. _____

5 Name two plants (grains) that grow in your area. _____

6 Harvesting festival of Gujarat is _____ and Maharashtra is _____

7 In my house _____ (grain) and _____ (grain) is used as food.

8 Encircle the odd one out: Cooking Oil, Spices, Engine Oil, Grains

9 Fill in the blanks

Without us plants cannot grow: _____ & _____. (Oil, Water, Ink, Air)

10 Encircle the odd one out: Sugar, Tea, Spices, Egg



KENDRIYA VIDYALAYA SANGATHAN

AHMEDABAD REGION

GRADED WORKSHEET

Name of the KV _____

CLASS : 5

SECTION :

SUBJECT: EVS

LEVEL : 2

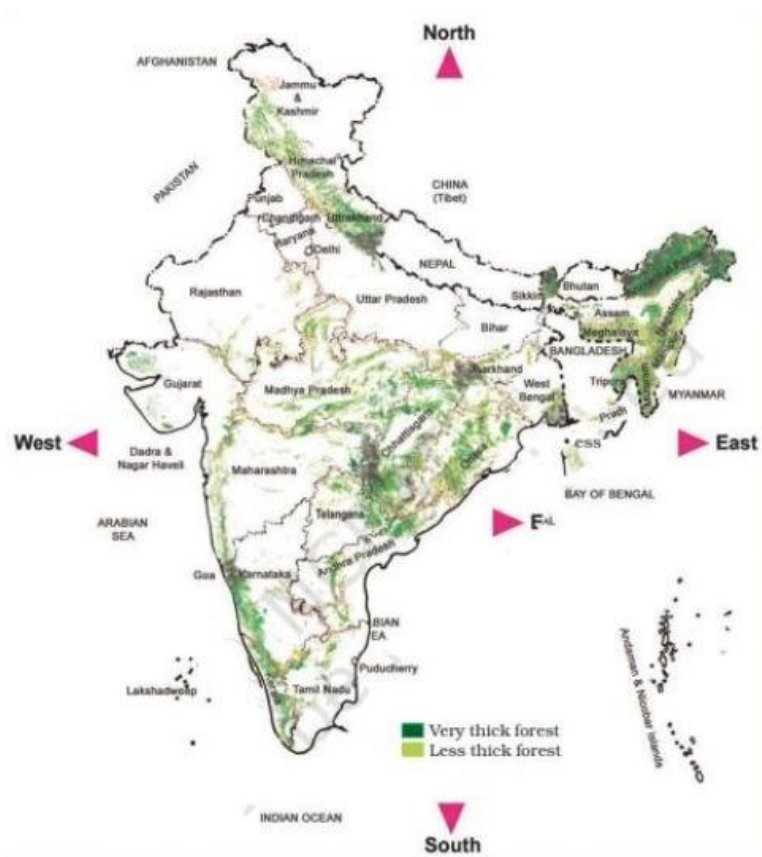
Concept : FOOD AND PLANT

Max. Marks : 10

Name of the Student : _____ Roll No. _____

Date : _____ Marks Obtained: _____ Sign of Teacher _____

- 1 Name any two crops grown in winter season. _____
- 2 Undhiyu is very famous dish of _____ state mostly eaten on _____ festival.
- 3 A large area covered with many trees is called _____.
- 4- _____ helps in growth of plants. (Fertilizer, sea water, oil)
- 5 Unwanted plants grown without being planted is called _____.
- 6 "Torang" means _____ in Kuduk language.



7. Name four states which have very thick forests

_____, _____, _____, _____

8. Name four states which have less thick forests

_____, _____, _____, _____



KENDRIYA VIDYALAYA SANGATHAN
AHMEDABAD REGION
GRADED WORKSHEET

Name of the KV _____

CLASS :5

SECTION :

SUBJECT: EVS

LEVEL : 3

Concept : FOOD AND PLANT

Max. Marks :10

Name of the Student : _____ Roll No. _____

Date : _____ Marks Obtained: _____ Sign of Teacher _____

(Q. 1 to 5 carries 2 marks each)

1 Write "True" or "False" against the sentence.

a. Natural fertilizer is harmful to the plants and soil. _____

b. Farming is not possible on the mountains and hilly area. _____

2 Gujarati people live in _____ state; _____ is their harvesting festival.

3 List any 4 products we get from forest.

1 _____

2 _____

3 _____

4 _____

4 Earthworm is called farmer's friend, why?

5 Arrange these farming processes in correct order.

Sowing seeds

Ploughing

Irrigation (watering)

Cutting Crops

1st _____

2nd _____

3rd _____

4th _____

6 Observe the picture and write.



a. Other than trees what all is there in a forest?

b. Why the trees in mountainous region have needle like leaves? Give any 1 reason.

c.

d.

-



KENDRIYA VIDYALAYA SANGATHAN
AHMEDABAD REGION
GRADED WORKSHEET

Name of the KV _____

CLASS :5

SECTION :

SUBJECT: EVS

LEVEL : 4

Concept : FOOD AND PLANT

Max. Marks :10

Name of the Student : _____ **Roll No.** _____

Date : _____ **Marks Obtained:** _____ **Sign of Teacher** _____

1 Differentiate between the modern farming method and traditional farming method.

Modern Farming Method/ techniques	Traditional Farming Method/ techniques
1	1
2	2

2 Why drip irrigation is the best method of irrigation? Give any two reasons.

1. _____

2. _____

3 What is “Right to Forest Act”? In which year does it passed?

4 What may happen if we cut or destroy all forests?

5 Why trees are being cut on a large scale nowadays? Give any 2 correct reasons



KENDRIYA VIDYALAYA SANGATHAN

AHMEDABAD REGION

GRADED WORKSHEET

Name of the KV _____

CLASS :5

SECTION :

SUBJECT: EVS

LEVEL : 1

Concept : TRAVEL

Max. Marks :10

Name of the Student : _____ Roll No. _____

Date : _____ Marks Obtained: _____ Sign of Teacher _____

1. Put a tick mark [✓] on the vehicles which can run without fuel :-



[]



[]



[]

2. Identify the following pictures using the help box:-

(Car, Metro train, , bus, cycle rickshaw)





3. Name the place shown in the picture :-



Ans. _____

4. Name the fuel used in this vehicle :-

Ans.



5. Fill in the blanks with suitable word given in the box :-

(Naturally, Diesel, Petrol, Bicycles)

A) There are hardly any _____ on the highway.

B) _____ and _____ will not last forever.

6. Write 2 uses of petroleum oil?

7. Encircle alternative fuel used for transport instead of petrol :-

Electricity , Cow dung cake (Uple), LPG, Dry wood

8. Write " T " for true and " F " for false against the following statements:

A) Petrol and diesel are found above the ground. []

B) We should not save Petrol. []

9. i) Tick petroleum product used for transport

a) Solar energy [] b) Electricity [] c) diesel []

ii) Which mode of transport does not cause pollution?

a) Train [] b) Bus [] c) Car [] d) Bicycle []

10. Name the mode of transport you use to come to school.

Ans .



KENDRIYA VIDYALAYA SANGATHAN

AHMEDABAD REGION

GRADED WORKSHEET

Name of the KV _____

CLASS :5

SECTION :

SUBJECT: EVS

LEVEL : 2

Concept : TRAVEL

Max. Marks :10

Name of the Student : _____ Roll No. _____

Date : _____ Marks Obtained: _____ Sign of Teacher _____

(Q 1 to 6 are of 1 mark each Q 7 & 8 are of 2 marks each.)

1. Write the full form of

A) CNG _____

2. Fill in the blank

Car can run on _____ (CNG, Firewood, and Kerosene)

3. Encircle two fuel names from the maze:-

P	E	T	R	O	L	E	D
L	F	F	G	J	L	U	I
D	I	E	S	E	L	X	E

4. Write 2 ways to save fuel. (Petroleum)

Ans. _____

5. Tick (✓) the correct answer:-

A) To clean oil found deep down in the earth , it is sent to

i) Pumps []

ii) Oil depot []

iii) Refinery []

iv) mills []

6. What problem can we have from the smoke coming out from the vehicles?

Ans. _____

7. Write any 2 traffic rules.

Ans. _____

8 Classify them (Car, Bus, Bicycle, Bullock cart)

Runs on Fuel	Runs without fuel



KENDRIYA VIDYALAYA SANGATHAN
AHMEDABAD REGION
GRADED WORKSHEET

Name of the KV _____

CLASS :5 SECTION : SUBJECT: EVS LEVEL : 3

Concept : TRAVEL Max. Marks :10

Name of the Student : _____ Roll No. _____

Date : _____ Marks Obtained: _____ Sign of Teacher _____

1. Write T for true statements and F for False statements :-

- a) Oil pump down from the ground is a smelly, thick, dark coloured liquid. []
- b) Oil is formed naturally and quickly. []

2. Fill in the blanks:-

- A) There is a lot of smoke when _____ wood is burnt.
- B) Vehicles refill their tanks at _____.

3. Read the following passage and answer the questions:-

Treasure from the earth

It is not easy to find out where oil is, deep down below the earth. Scientists use special techniques and machines to find this out. Then throw pipes and machines petroleum is formed up. This oil is a smelly, dark coloured liquid. It contains many things mixed in it. To clean and separate these, it is sent to a refinery. Have you heard of a 'refinery'? It is from this 'petroleum' or oil that we get kerosene diesel petrol engine oil and fuel for aircraft. Do you know that LPG (cooking gas), wax, coal tar and grease are also obtained from this? It is also used in making several other things like plastics and paints.

i) From where do we get petroleum?

Ans.

ii) Name any 2 products obtained from oil (petroleum).

Ans.

4. Explain these words:-

a) Petroleum:

b) Refinery

5. Write two ways to save petrol.

Ans.

6.Solve the riddles :-

A) I light your lamps,
I cook your foods,
I run your machines,
Fly planes in the sky !
Who is more useful
To people ,than I?
Who am I ?
I'm black, I'm thick, I'm smelly
I flow .Who am I ?

Ans. _____

B) It is a type of vehicle,
Which is sometimes a sedan?
There's an SUV or hatchback,
And sometimes a mini van,
Who am I?

Ans. _____



KENDRIYA VIDYALAYA SANGATHAN
AHMEDABAD REGION
GRADED WORKSHEET

Name of the KV _____

CLASS :5

SECTION :

SUBJECT: EVS

LEVEL : 4

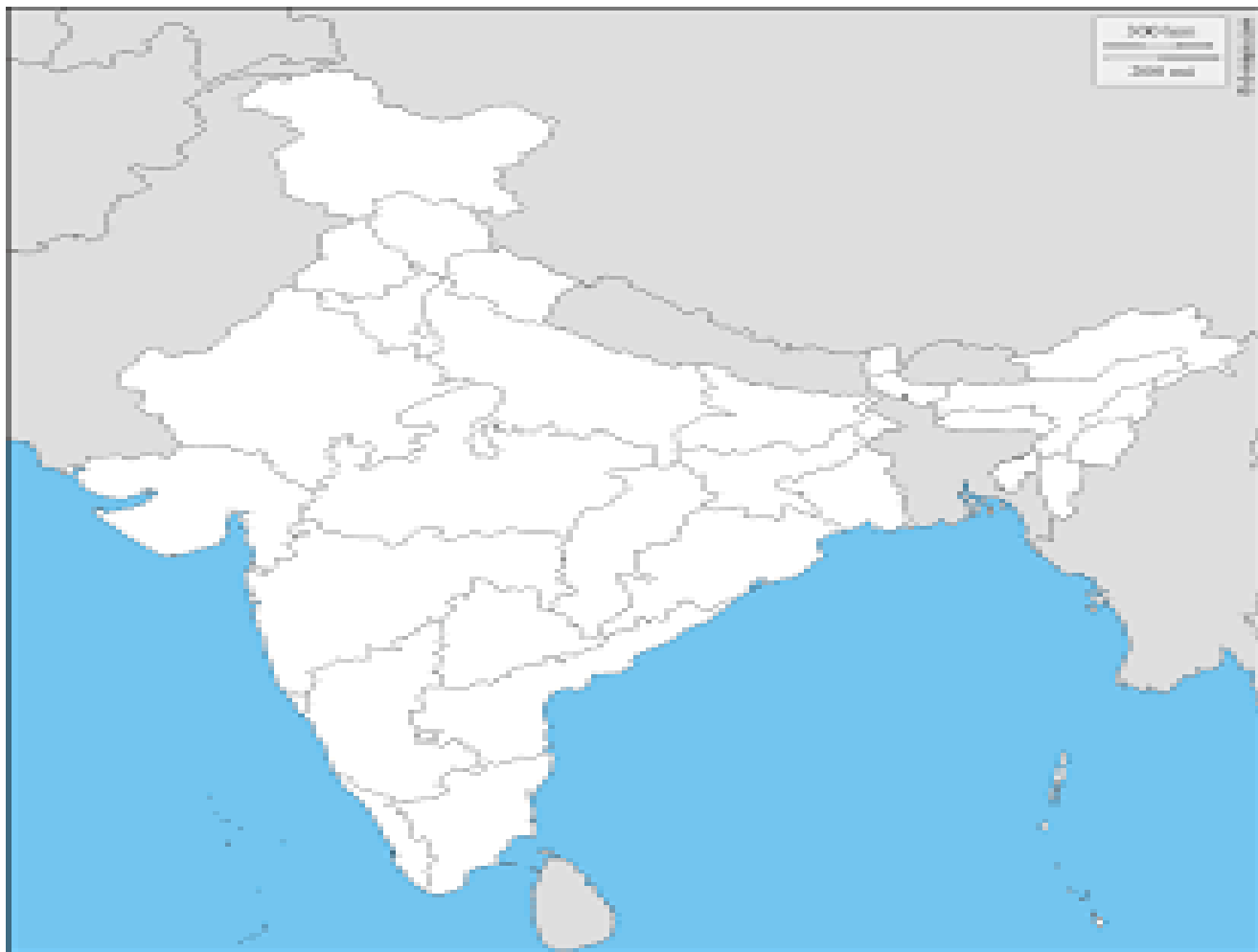
Concept : TRAVEL

Max. Marks :10

Name of the Student : _____ Roll No. _____

Date : _____ Marks Obtained: _____ Sign of Teacher _____

1. Name & locate any four oil fields in the political map of India.



Ans.

STATE	OIL FIELD

2.Suggest two ways to control air pollution :-

Ans. _____

3. Match the following

Animal power	Bicycle
Manpower	Bullock Cart
Electricity	Car
Diesel & Petrol	Train

4. A) Write 2 alternative sources of energy.

Ans. _____

B) Write the name of one fossil fuel?

Ans. _____

5. Write any 2 problems we face due to increasing number of vehicles on the road.



KENDRIYA VIDYALAYA SANGATHAN AHMEDABAD REGION GRADED WORKSHEET

Name of the KV _____

CLASS :5

SECTION :

SUBJECT: EVS

LEVEL : 1



Concept : SHELTER

Max. Marks :10

Name of the Student : _____ Roll No. _____

Date : _____ Marks Obtained: _____ Sign of Teacher _____

1. To protect ourselves from heat cold & rain we need _____.
2. The names of types of house are given in jumbled form along with their pictures. Write their correct names in the space provided :

Picture	Jumbled form	Correct Name
	b) TFALS	
	c) NUBLWOAG	

3. Name the following types of houses :-





4. Fill in the blanks with the appropriate words given in the box :-
(Houseboat, Tent , donga , Flat)

a) Tourists who come to Srinagar love to staying a _____.

b) Many families in Srinagar live in _____.

5. Put a tick (✓) mark on the correct answer :-

Which of the following is not a type of house?

i) Dab []

ii) Houseboat []

iii) Donga []

iv) Rebo []

6. Write T for true statements and F for false statements :-

A) Ladakh gets very little rainfall.

B) Changthang is at a height of almost 6000 metres.

7. What type of roof do you have in your house?

Ans. _____

8. Have you ever seen a tent house?

Ans. _____

9. Give any 2 names of movable house?

Ans. _____

10. What type of houses do you see in your area?

Ans. _____



KENDRIYA VIDYALAYA SANGATHAN

AHMEDABAD REGION

GRADED WORKSHEET

Name of the KV _____

CLASS :5

SECTION :

SUBJECT: EVS

LEVEL : 2

Concept : SHELTER

Max. Marks :10

Name of the Student : _____ Roll No. _____

Date : _____ Marks Obtained: _____ Sign of Teacher _____

Q 1 to 6 are of 1 mark each Q 7 & 8 are of 2 marks each.

1. Some old houses in Srinagar have a special window which comes out of the wall known as :

i) Lekha [] ii) Dab [] iii) Donga [] iv) Mehrab []

2. _____ are the beautiful arches in the old houses in Srinagar.

3. Beautiful carvings made on the roof of the house boat is called _____

4. Tourist enjoys the ride of beautiful boats called _____ on Dal lake. (Hint: ishkaara)

5. Which lake is situated near Srinagar? What kind of houses are seen near the lake?



Ans.

6. Encircle the odd one :-

1) House boat , Lekha , Rebo , Pashmina

2) Leh , Ladakh , Mumbai , Jammu , Shrinagar

7.Observe the picture and answer the following questions :-



A) Changpa people live in such tents. What do they call their tents?

Ans. _____

B) Near the tents Changpas keep their animals. What do they call this place?

Ans. _____

8 Write any 4 things that you must carry if you have to stay in a tent for two days



KENDRIYA VIDYALAYA SANGATHAN

AHMEDABAD REGION

GRADED WORKSHEET

Name of the KV _____

CLASS :5

SECTION :

SUBJECT: EVS

LEVEL : 3

Concept : SHELTER

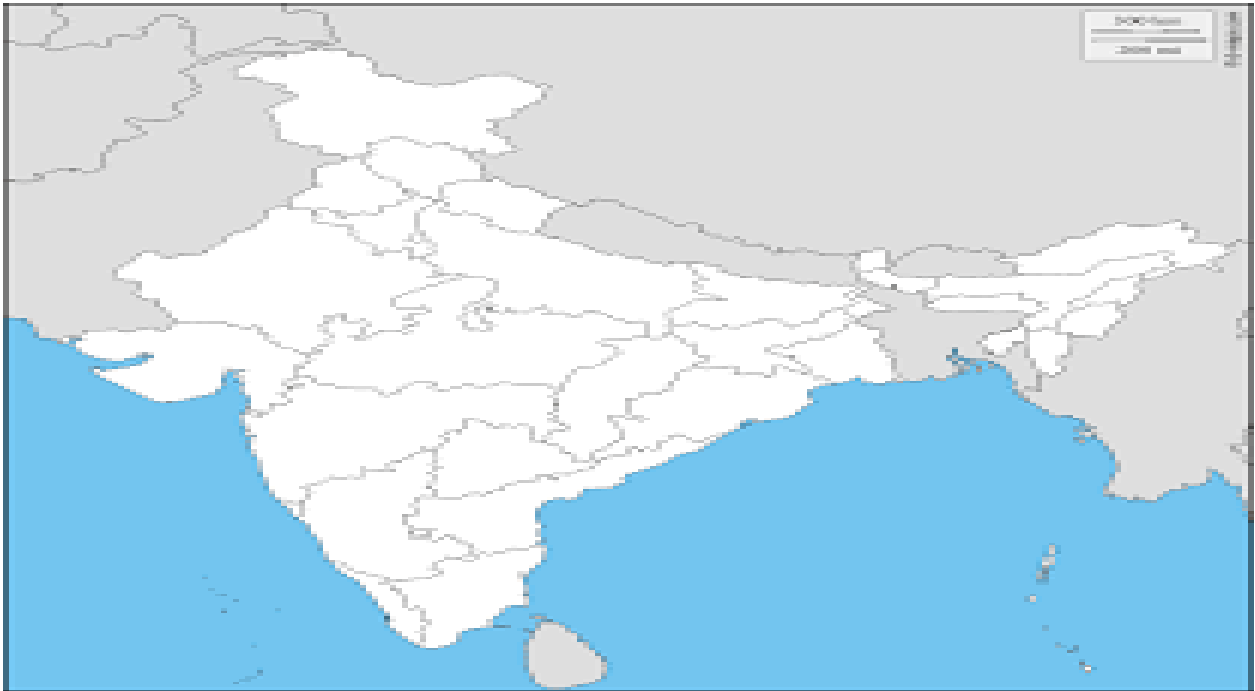
Max. Marks :10

Name of the Student : _____ Roll No. _____

Date : _____ Marks Obtained: _____ Sign of Teacher _____

Note: Q 1 & 2 are of 1 marks each & Q 3 to 6 are off 2 marks each.

- 1 A big conical tent made of yak hair set up by the Changpas is called _____.
- 2 Boat house is found in _____ state also other than Srinagar.
- 3 While going from Mumbai to Delhi, Gaurav Jani passed through several states. Locate those states in the map.



- 4 Name the states you located in the map.

- 5 Name the capitals of the above located states.

6. Match the following:-

A	B
Houses in Mumbai are	Rebo
Bakarwal people live in houses	Love to stay in houseboats
Tourists in srinagar	Made of cement , bricks, glass , steel
House of Changpas is known as	Made of stone and mud



KENDRIYA VIDYALAYA SANGATHAN
AHMEDABAD REGION
GRADED WORKSHEET

Name of the KV _____

CLASS :5

SECTION :

SUBJECT: EVS

LEVEL : 4

Concept : SHELTER

Max. Marks :10

Name of the Student : _____ Roll No. _____

Date : _____ Marks Obtained: _____ Sign of Teacher _____

1. What kind of shelter do you find in hilly area? Why?

2. How is your house different from your house? Give any 2 differences.

3 Read the passage and answer the questions.

The world famous Pashmina shawl

It is believed that a pashmina shawl is as warm as 6 sweaters! It is very thin yet very warm. The goats from which the soft pashmina wool is collected are found at very high altitudes of 5000 metres. In winter, temperature here drops below 0°C (down to - 40°C) .

A) What is so special about pashmina shawls?

Ans. _____

B) From which animal is the wool for pashmina shawl obtained?

Ans. _____

2. Write any one similarity and one difference in the life of Bakarwal people and the life of the Changpas?

Similarity: _____

Difference: _____

3. Give reason for this:-

A) Goats are treasure for the Changpa tribe.

Ans. _____

B) Each family each family puts a special mark on their animals.

Ans. _____

4. Match the following:-

A	B
Houses in Mumbai are	Rebo
Bakarwal people live in houses	Love to stay in houseboats
Tourists in srinagar	Lekha
House of Changpas is kown as	Made of stone and mud
Place to keep sheep and goats as known as	Made of cement , bricks, glass , steel

5. You have read about different kinds of shelters in Jammu and Kashmir and Ladakh .Some on high Mountains, some on water , some with beautiful designs in wood and stone and some movable Shelters that can even be packed and carried to another place.

A) Describe how this shelters suit the needs of the people who live there.

Ans . _____

B) How are these shelters different from the house you live in?

Ans . _____



COORDINATOR

Ms. APARAJITA ACHARYA

PRINCIPAL , K V NO.4 ONGC BARODA

TECHNICAL COORDINATOR



MR. VIKRAM PARMAR

PRT, KV NO.1 SURAT

MODERATION TEAM

Ms. SUSHMITA MOHANTI

HM, KV CHANDKHEDA



Ms. SAROJ BALA

HM, KV NO.1 BARODA

SN	NAME OF THE TEACHER	DESIGNATION	NAME OF THE KV
1	MR. MEHUL MAKWANA	PRT	KV EME BARODA
2	MS. NEHAL	PRT	KV VVNAGAR
3	MS. JOLLY PARMAR	PRT	KV AFS MAKARPURA
4	MS. SANGEETA	PRT	KV EME BARODA

PREPARATION TEAM

SN	NAME OF THE TEACHER	DESIGNATION	NAME OF THE KV
1	MS. YASMIN	PRT	KV RAJKOT
2	MS. HETAL	PRT	KV EME BARODA
3	MS. DARSHANA CHAUHAN	PRT	KV JETPUR
4	MR. DIVYESH JOSHI	PRT	KV VALSURA
5	MR. BHARAT	PRT	KV AHMEDABAD CANTT
6	MS. ANITA BILWAL	PRT	KV NO.1 HARNI BARODA
7	MS. RUBY	PRT	KV NO.1 AFS JAMNAGAR
8	MS. URMILLA VERMA	PRT	KV NO.1 HARNI BARODA
9	MS. PRIYANKA	PRT	KV ONGC CHANDKHEDA